



PATTERN BLOCK FRACTIONS



if ...  = 1

1. ...then  = _____

2. ...and  = _____


3. ...and  = _____

what if ...  = 1

4. ...then  = _____

5. ...and  = _____

6. ...and **CHALLENGE!**  = _____

If  = 1, design a shape that equals $3\frac{1}{2}$ without using any blue parallelograms.
Trace it below: